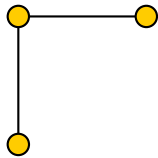


Pretend Quiz 13

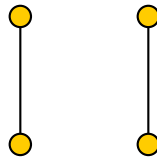
This quiz is not graded. It is for practice purposes only.

1. Below are several models of unlabeled graphs. In each case, decide if the graph has the specified property or provide a numerical answer.

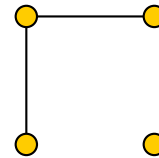
A



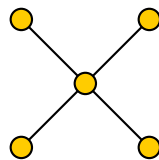
B



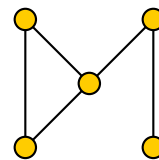
C



D



E



	is Eulerian?	is Hamiltonian?	is connected?	is a tree?	number of subgraphs with one edge
A					
B					
C					
D					
E					